

Class III


Date

Name

Class

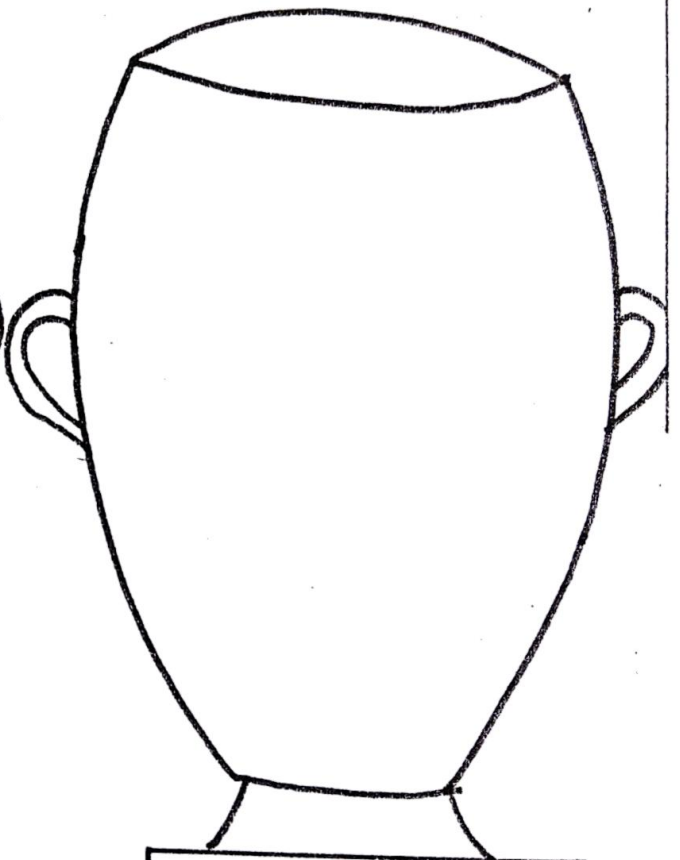
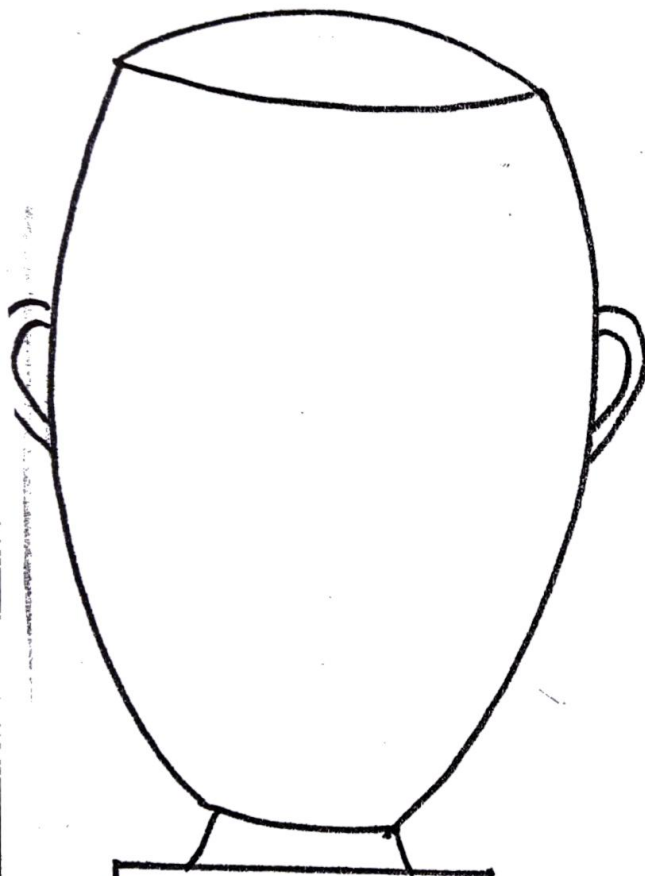
The name of
my story is

Author



Present form of Verbe

Past form of Verbe



Problems found

Solutions

Suggest a suitable Title.....

Date:

Writing a Paragraph

Look at this picture. Write a paragraph about it.



You may use these points to write the paragraph.

birthday — party — mother — tasty snacks — cake — friends — grandmother, dress — grandfather, bicycle

You can begin like this.

It was my birthday yesterday.

Grade:

Signature:



Blank lined paper with horizontal ruling lines.

WORKSHEET 1

DATE



Articles

▶ Fill in the blanks with a, an or the. There can be more than one correct answer for some.

This is _____ hen's egg.



_____ small bird is flying.

_____ puppies are playing.



_____ ostrich has very big eyes.

Look at _____ beautiful butterfly!

_____ dentist cured my toothache.

I have _____ very friendly dog called Bruno.



Let us go to _____ new hotel for dinner.

Mr Sareen took _____ umbrella with him.

I have _____ colourful book of games and puzzles.


Tell Nitin not to pluck _____ flowers from _____ garden.




Ravi and Sia bought _____ ice creams from _____ shop.

There was _____ banana and _____ apple in my lunch box.

There are little frogs and fishes in _____ pond near my house.



Edit the paragraph. Check the punctuation and spellings. Revise after editing. Do it in your English copy.



The blue whale is the biggest animal on earth some are as long as 100 feet and weighing 300,000 pounds? In the late 1800s and early 1900s these gentle giants were hunted almost to extinction because humans wanted their blubber to make oil fuel soap and candles. their baleen was used to make brushes and corsets. the blue whale population is now only one percent of it's original size.

In order to remain healthy, you must eat good nutritious food. breakfast is very important especially if your going to school because you cant pay attention if your hungry. You should eat fruits and vegetables with every meal and avoid food that is high in kololesterol and saturated fat. Its also important to drink alot of likwids every day.

WORKSHEET 14

DATE



Travel and Communication

▶ Match the columns.

A	B
ships safely load and unload the passengers and cargo	export
carry passengers across the seas from one country to another	inter-state bus service
underground train	international airline
goods are sent to other countries	ocean liners
connects with other countries	harbour
a service that runs along the highways and links all parts of India	metro

▶ Tick (✓) the correct statements and cross (X) out the wrong ones.

To talk to a friend in another country, we have to use the ISD facility.

We can send letters through speed post via Internet.

Sending messages through e-mails takes a considerable amount of time.

Newspaper, television and radio are called mass media.

Satellites enable communication through STD.

▶ Find out!

Who invented the telephone?

.....

Who invented the television?

.....

Who invented the radio?

.....

Who invented the first successful airplane?

.....

Remember

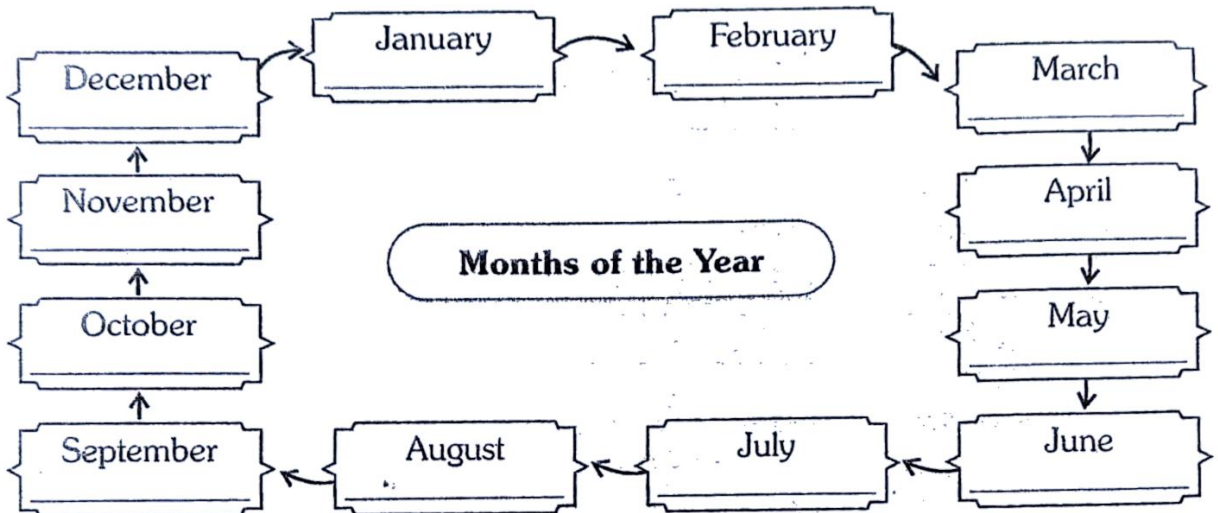
Several modes of transport are available to us. Important towns/cities are connected to each other through state and national highways. We also have a good rail and air network.



Date:

Calendar

Write the number of days to reach month.



Fill in the blanks.

1. _____ is the first month of the year.
2. _____ is the last month of the year.
3. _____ is the shortest month of the year.
4. How many months have 30 days? _____
5. How many months have 31 days? _____
6. There are _____ days in a year.
7. There are _____ days in a leap year. _____
8. There are _____ weeks in a month. _____
9. Every fourth year is _____ year.
10. The February month of a leap year has _____ days.
11. Christmas falls in the month of _____.
12. Is 2016 a leap year? _____

Grade:

Signature:

Homework 31

1. Rama travelled for 9 hours 30 minutes by train and for 2 hours 45 minutes by bus. Find the total time taken by Rama for the journey.

2. Our school starts at 8.10 a.m. It works for 5 hours 20 minutes. At what time does school end?

3. An aeroplane leaves Bombay at 16.50 hours and reaches Delhi at 18.30 hours. How long does it take to reach Delhi?

4. Ajay left Agra for Delhi at 7.40 a.m. If he takes 3 hours 20 minutes to reach Delhi, at what time will he reach?

Multiples of 2, 5 and 10 - Money

Observe the amount given and use different strategies to arrive at the result. One has been done for you.



Sl No.	Amount	Can you make it with just 2 Rs coins?	Can you make it with just 5 Rs coins?	Can you make it with just 10 Rs Note?
1	Rs 20	10	4	2
2	Rs 15			
3	Rs 6			
4	Rs 32			
5	Rs 45			
6	Rs 25			
7	Rs 50			
8	Rs 62			
9	Rs 185			
10	Rs 118			
11	Rs 92			
12	Rs 120			
13	Rs 135			
14	Rs 200			




Flying Kites

Subject: Mathematics Class: III
Name:

4

The boys of St. Joseph School had a kite flying competition. Position of Jeff's kite is shown. Use the markings given to complete the worksheet.




Draw:

- Charl's kite 2 markings lower than Jeff's kite
- Toby's kite 1 marking higher than Jeff's kite.
- Tom's kite at a height half as that of Jeff's.
- Tim's kite 4 markings above the ground.
- Jerry's kites at a height double that of Tim's.
- John's kite 2 markings above Jerry's kite.
- Jack's kite at the same height as that of Jeff's.

Learning Outcome: Interprets the position of an object by drawing it at different levels using a marked scale

Paste
Sticker
Here

edunte



बूझो पहेली

1) बालों के अंदर एक फल,
उसमें भरा है सुन्दर जल।
प्यासों की मैं प्यास बुझाऊँ,
और पूजा के काम मैं आऊँ।

2) लकड़ी का है मेरा तन,
चलती हूँ पैरों के बिन
सागर झील की सैर कराऊँ,
बिन पुल नदियाँ पार कराऊँ।

ऐसी पहेलियाँ तुम भी बनाओ या ढूँढ़कर लिखो।

②

चित्रों के अंकों का मिलानकर सही पर्यायवाची नाव में भरें।

